

Can you label these coins?



83

What is this number?
What is one more than this number?

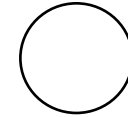
What is one less than this number?

** What is 10 more than this number?

** What is 10 less than this number?

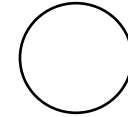
Can you draw <, > or = in the circles below?

double 6



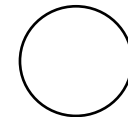
15

5 + 5




9

18 - 5



13

double 3



5

Addition.

$$0+2=$$

$$5+1=$$

$$9+3=$$

$$14+4=$$

$$16+0=$$

$$13+5=$$

$$0+17=$$

What is double each of these numbers?

*2

*3

*5

*8

Complete the fact families.

$$\square + \square = \square$$

$$\square - \square = \square$$

$$\square + \square = \square$$

$$\square - \square = \square$$

$$\square = \square + \square$$

$$\square = \square - \square$$

$$\square = \square + \square$$

$$\square = \square - \square$$

